

Thursday :

- Review: common ODE. pdf.
Brightspace → Content → Useful links
- Review final from Spring 2017.

Next week:

Additional office hours: Check in the announcement.

Dec. 16.

7.5 Periodic and Piecewise Continuous Input Functions

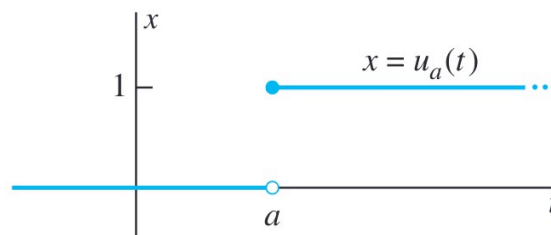
Unit Step Function

The unit step function at $t = a$ is defined by

$$u_a(t) = u(t - a) = \begin{cases} 0 & \text{if } t < a, \\ 1 & \text{if } t \geq a. \end{cases} \quad (1)$$

and if $a = 0$,

$$u(t) = \begin{cases} 0 & \text{if } t < 0, \\ 1 & \text{if } t \geq 0. \end{cases} \quad (2)$$



If $a > 0$, then

by def

$$\mathcal{L}\{u(t - a)\} \stackrel{\text{by def}}{=} \int_0^{\infty} e^{-st} u_a(t) dt = \int_a^{\infty} e^{-st} dt = \lim_{b \rightarrow \infty} \left[-\frac{e^{-st}}{s} \right]_{t=a}^b.$$

Thus

$$\mathcal{L}\{u(t - a)\} = \frac{e^{-as}}{s}, \quad (s > 0, a > 0). \quad (3)$$

- Recall $\mathcal{L}\{u(t)\} = \frac{1}{s}$, this equation implies that multiplication of the transform of $u(t)$ by e^{-as} corresponds to the translation $t \rightarrow t - a$ in the original independent variable.
- Theorem 1 tells us that this fact, when properly interpreted, is a general property of the Laplace transformation.

Theorem 1 Translation on the t -Axis

If $\mathcal{L}\{f(t)\}$ exists for $s > c$, then

$$\mathcal{L}\{u(t-a)f(t-a)\} = e^{-as}F(s) \quad (4)$$

and

$$\mathcal{L}^{-1}\{e^{-as}F(s)\} = u(t-a)f(t-a) \quad (5)$$

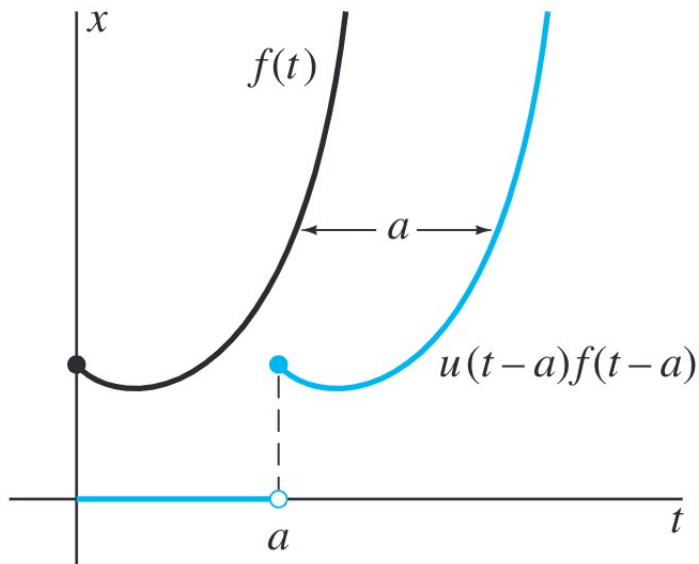
for $s > c + a$.

Remark

- Note that

$$u(t-a)f(t-a) = \begin{cases} 0 & \text{if } t < a, \\ f(t-a) & \text{if } t \geq a. \end{cases} \quad (6)$$

- Thus Theorem 1 implies that $\mathcal{L}^{-1}\{e^{-as}F(s)\}$ is the function whose graph for $t \geq a$ is the translation by a units to the right of the graph of $f(t)$ for $t \geq 0$.



We will use Eq(5) to find the inverse Laplace transform of Example 1 and Example 2.

Recall

$$\mathcal{L}^{-1}\{e^{-as}F(s)\} = u(t-a)f(t-a) \quad (5)$$

Example 1 Find the inverse Laplace transform f of the given functions. Then sketch the graph of f .

$$F(s) = \frac{e^{-3s}}{s^2}$$

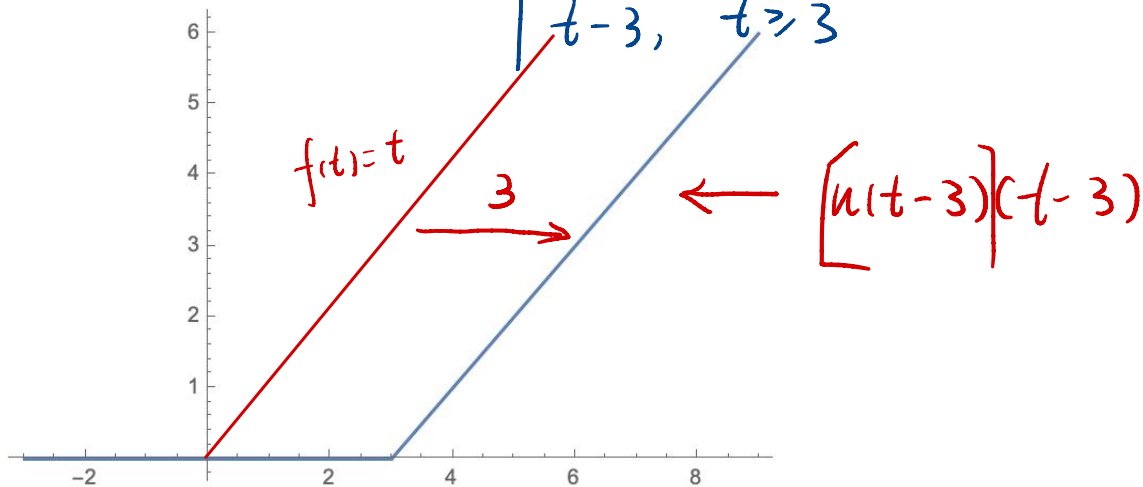
$$a=3 \quad F(s) = \frac{1}{s^2} \Rightarrow f(t) = t$$

ANS: By Eq(5). $\mathcal{L}^{-1}\left\{\frac{e^{-3s}}{s^2}\right\} = u(t-3) \cdot f(t-3)$

$$= u(t-3) \cdot (t-3)$$

$$= \begin{cases} 0, & t < 3 \\ 1, & t \geq 3 \end{cases} \cdot (t-3)$$

$$= \begin{cases} 0, & t < 3 \\ t-3, & t \geq 3 \end{cases}$$



Example 2 Find the inverse Laplace transform f of the given functions. Then sketch the graph of f .

$$F(s) = \frac{s(1 + e^{-3s})}{s^2 + \pi^2}$$

Ans:

$$= \frac{s}{s^2 + \pi^2} + e^{-3s} \frac{s}{s^2 + \pi^2}$$

$$\mathcal{L}^{-1}\{e^{-as}F(s)\} = u(t-a)f(t-a)$$

$$\mathcal{L}^{-1}\{F(s)\} = \mathcal{L}^{-1}\left\{\frac{s}{s^2 + \pi^2}\right\} + \mathcal{L}^{-1}\left\{e^{-3s} \cdot \frac{s}{s^2 + \pi^2}\right\}$$

$$F(s) = \frac{s}{s^2 + \pi^2}$$

$$\downarrow$$

$$f(t) = \cos \pi t$$

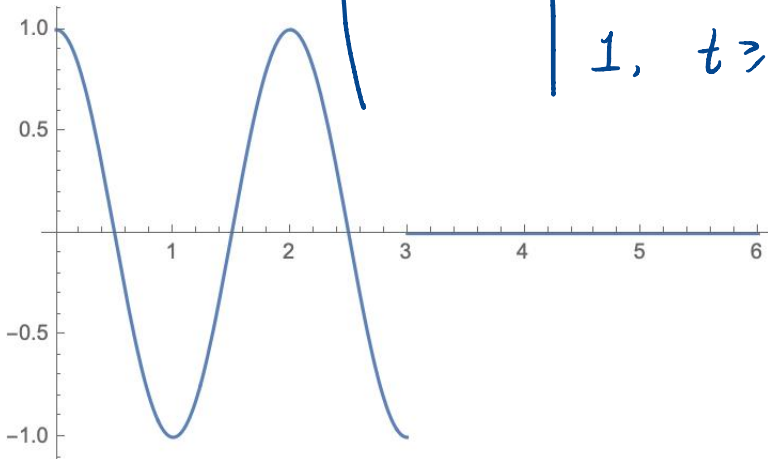
$$= \cos \pi t + u(t-3) \cdot f(t-3)$$

$$= \cos \pi t + u(t-3) \cdot \cos[\pi(t-3)] \rightarrow \cos(\pi t - 3\pi) = -\cos \pi t$$

$$= \underline{\cos \pi t} - u(t-3) \cdot \underline{\cos \pi t}$$

$$= [1 - u(t-3)] \cdot \cos \pi t$$

$$= \left(1 - \begin{cases} 0, & t < 3 \\ 1, & t \geq 3 \end{cases} \right) \cdot \cos \pi t$$




$$= \left(\begin{cases} 1-0=1, & t < 3 \\ 1-1=0, & t \geq 3 \end{cases} \right) \cdot \cos \pi t$$

$$= \begin{cases} \cos \pi t, & t < 3 \\ 0, & t \geq 3 \end{cases}$$

Note

$$1 - u(t-3) = \begin{cases} 1, & t < 3 \\ 0, & t \geq 3 \end{cases}$$



We will use Eq (6) to find the Laplace transform of Example 3 and Example 4.

Recall

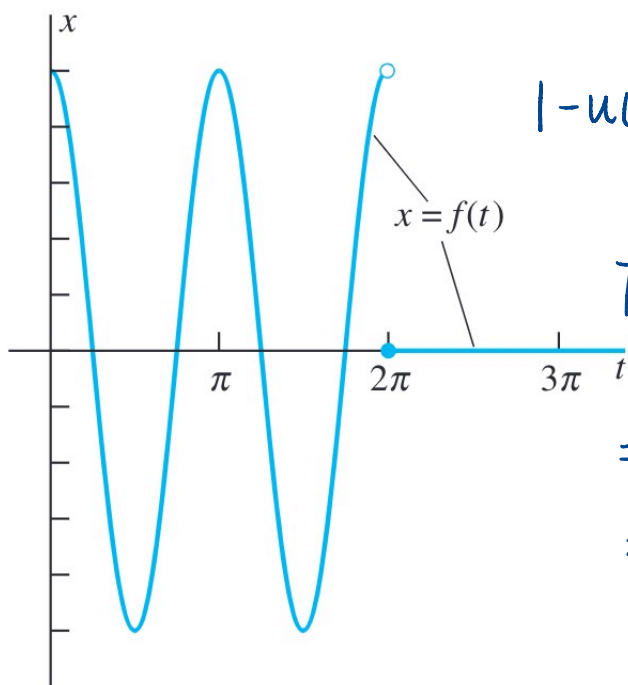
$$\mathcal{L}\{u(t-a)f(t-a)\} = e^{-as}F(s) \quad (6)$$

Example 3 Find the Laplace transform of the given function.

$$f(t) = \begin{cases} \cos 2t & \text{if } 0 \leq t < 2\pi, \\ 0 & \text{if } t \geq 2\pi. \end{cases} \quad (7)$$

The graph of $f(t)$ is shown in the figure.

ANS: We need to write $f(t)$ in terms of $u(t-a)$ & $g(t-a)$ when $t \geq 0$.



$$u(t-2\pi) = \begin{cases} 0, & 0 \leq t < 2\pi \\ 1, & t \geq 2\pi \end{cases}$$

$$\Downarrow$$

$$1 - u(t-2\pi) = \begin{cases} 1, & 0 \leq t < 2\pi \\ 0, & t \geq 2\pi \end{cases}$$

Then $f(t) = [1 - u(t-2\pi)] \cdot \cos 2t$

$$= \cos 2t - u(t-2\pi) \cdot \cos 2t$$

$$= \cos 2t - u(t-2\pi) \cdot \cos [2(t-2\pi)]$$

$$\cos(2t - 4\pi) = \cos 2t$$

Then $\mathcal{L}\{f(t)\} = \mathcal{L}\{\cos 2t\} - \mathcal{L}\{u(t-2\pi) \cdot \cos [2(t-2\pi)]\}$

$$= \frac{s}{s^2+4} - e^{-2\pi s} \cdot \frac{s}{s^2+4}$$

$$= s \frac{(1 - e^{-2\pi s})}{s^2+4}$$

$\mathcal{L}\{u(t-a)f(t-a)\} = e^{-as}F(s)$
 $\Rightarrow f(t-2\pi) = \cos[2(t-2\pi)]$
 \Downarrow
 $f(t) = \cos 2t$

Example 4 Find the Laplace transform of the given function.

$$f(t) = \begin{cases} \sin t & \text{if } 0 \leq t \leq 3\pi, \\ 0 & \text{if } t > 3\pi. \end{cases} \quad (8)$$

ANS: $f(t) = [1 - u(t - 3\pi)] \cdot \sin t$

$= \sin t - u(t - 3\pi) \cdot \sin t$ Want $t - 3\pi$

$= \sin t + u(t - 3\pi) \cdot \sin(t - 3\pi)$ Recall $\sin(t - 3\pi) = -\sin t$

$$\mathcal{L}\{f(t)\} = \mathcal{L}\{\sin t\} + \mathcal{L}\left\{u(t - 3\pi) \cdot \underbrace{\sin(t - 3\pi)}_{f(t) = \sin t}\right\}$$

$$= \frac{1}{s^2 + 1} + e^{-3\pi s} \cdot \frac{1}{s^2 + 1}$$
$$= \frac{1 + e^{-3\pi s}}{s^2 + 1}$$

Reading material

Transforms of Periodic Functions

Periodic Forcing Functions

- Periodic forcing functions in practical mechanical or electrical systems often are more complicated than pure sines or cosines.
- The nonconstant function $f(t)$ defined for $t \geq 0$ is said to be **periodic** if there is a number $p > 0$ such that

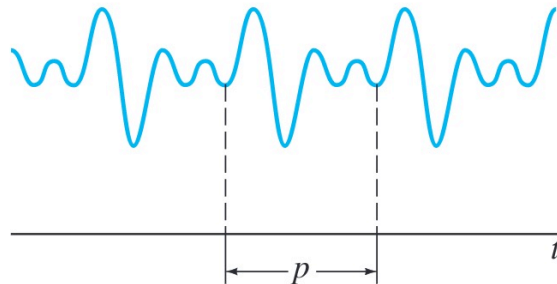
$$f(t + p) = f(t) \quad (9)$$

for all $t \geq 0$.

- The least positive value of p (if any) for which this equation holds is called the **period** of f .

Periodic Functions

- Such a function is shown in the figure.



- Theorem 2 simplifies the computation of the Laplace transform of a periodic function.

Theorem 2 Transforms of Periodic Functions

Let $f(t)$ be periodic with period p and piecewise continuous for $t \geq 0$.

Then the transform $F(s) = \mathcal{L}\{f(t)\}$ exists for $s > 0$ and is given by

$$F(s) = \frac{1}{1 - e^{-ps}} \int_0^p e^{-st} f(t) dt. \quad (10)$$